

3.Sınıf Matematik

Zihinden Toplama İşlemi



Aşağıdaki işlemleri zihinden toplayarak yapalım. Örnek:

$$\begin{array}{r} 24 \longrightarrow 20 + 4 \\ + 13 \longrightarrow + 10 + 3 \\ \hline \longleftarrow 30 + 7 \end{array}$$

$$\begin{array}{r} 32 \\ + 48 \\ \hline \end{array}$$

$$\begin{array}{r} 141 \\ + 24 \\ \hline \end{array}$$

$$\begin{array}{r} 78 \\ + 13 \\ \hline \end{array}$$

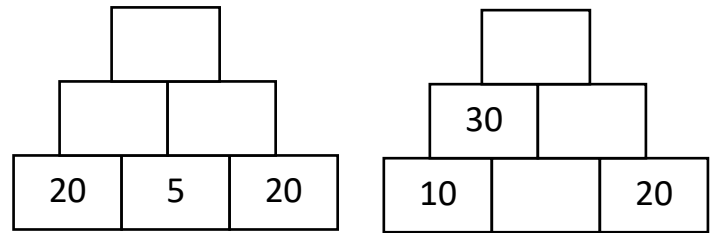
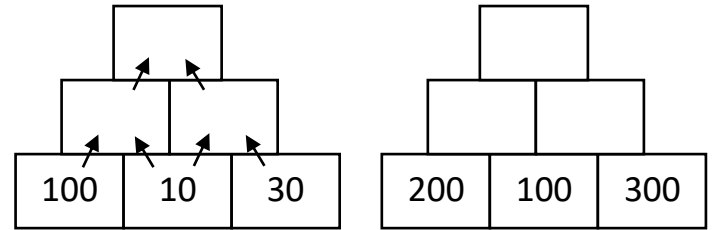
$$\begin{array}{r} 50 \\ + 25 \\ \hline \end{array}$$

$$\begin{array}{r} 52 \\ + 24 \\ \hline \end{array}$$


Aşağıdaki toplama işlemlerini yapıp boşlukları dolduralım.

+	20	5	100	1
200				
300				
400				

Aşağıdaki toplama işlemlerini aşağıdan yukarıya doğru yapalım.



62




46




15




+



=



+



=